









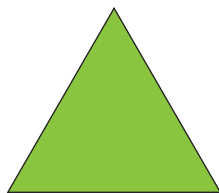

Solve the problems

Fill in the empty spots

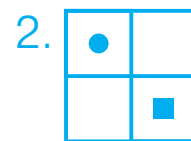
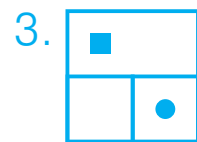
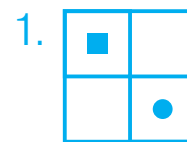

		
		
		

- Green City is larger than Pink City but smaller than Yellow City. Blue City is larger than Yellow City. Which city is larger, Blue City or Pink City? _____
- Sonia lives farther from the park than Elaine, and Diana lives closer to the park than Zara. Elaine lives farther from the park than Zara. Who lives the farthest from the park? _____

Find what does not fit?

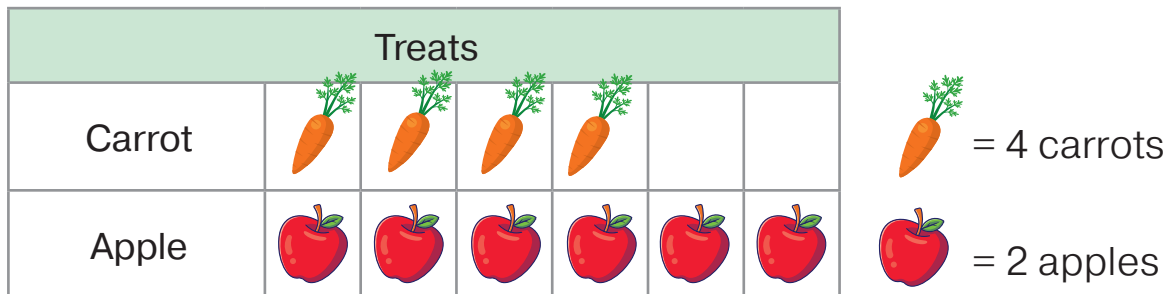


What do you get if you combine two pictures into one?



Solve the problems

Peter bought some treats for his pet horse. This picture graph shows how many of each food he bought.



- How many treats did Peter buy in total? _____
- How many carrots did Peter buy? _____
- How many apples did Peter buy? _____

Fill in the empty spots

$$\begin{array}{r} \square 9 \\ - 2 \square \\ \hline 30 \end{array}$$

$$\begin{array}{r} + 4 \square \\ \square 2 \\ \hline 91 \end{array}$$

$$\begin{array}{r} + 1 \square \\ \square 5 \\ \hline 31 \end{array}$$

$$\begin{array}{r} + \square 8 \\ 30 \\ \hline 7 \square \end{array}$$

- The yellow house is shorter than the blue house but taller than the black house. Which house is taller, the black house or the blue house? _____
- Maria lives closer to the school than Cynthia. Cynthia does not live farther from the school than Kathy. Who lives closer to the school, Maria or Kathy?