

### Use bills and coins



to show the amount to pay for goods

You do not have to fill all the spots



\$2.57





\$1.75

















\$0.16



## Getting change back

Add the value of the coins and write the total amount.  
Then, write how much change you will get back.

  <p>Your total money is _____ How much money is left over? _____</p>	  <p>Your total money is _____ How much money is left over? _____</p>
  <p>Your total money is _____ How much money is left over? _____</p>	  <p>Your total money is _____ How much money is left over? _____</p>
  <p>Your total money is _____ How much money is left over? _____</p>	  <p>Your total money is _____ How much money is left over? _____</p>