






Matching shapes to names

Draw a line between a shape and its name



Circle

Parallelogram

Rhombus

Pentagon

Semi-circle

Square

Trapezoid


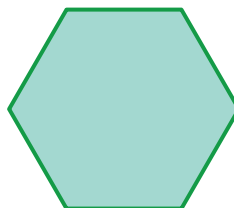



Hexagon

Triangle

Rectangle

Kite

Octagon





Drawing 2D shapes

Draw the shape indicated

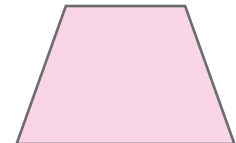

Square	Rectangle
Circle	Oval
Triangle	Rhombus
Star	Hexagon

Identify the 2D shapes

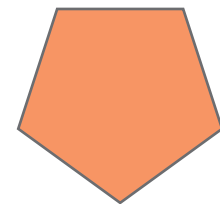

1. Which shape has exactly 1 square corner?



-
2. Which shape is a rectangle?



-
3. Which shape is a circle?



-
4. Which shape is a square?

