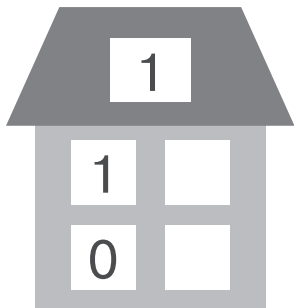


Composition of a number

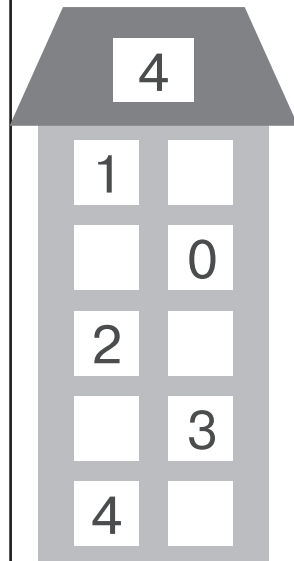
Fill in the blanks in the windows of the house. The sum of the numbers on each story of the house should equal the number indicated on the roof.



1

1	
0	

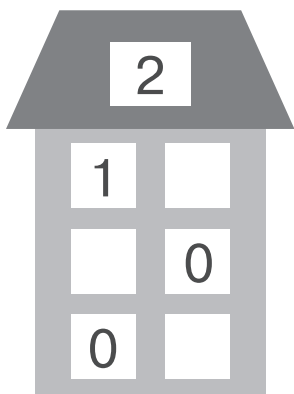
$0 + 1 = \underline{\quad}$
 $1 + 0 = \underline{\quad}$



4

1	
	0
2	
	3
4	

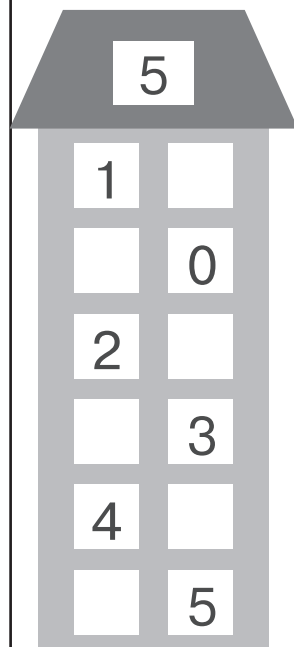
$0 + 4 = \underline{\quad}$
 $1 + 3 = \underline{\quad}$
 $2 + 2 = \underline{\quad}$
 $3 + 1 = \underline{\quad}$
 $4 + 0 = \underline{\quad}$



2

1	
	0
0	

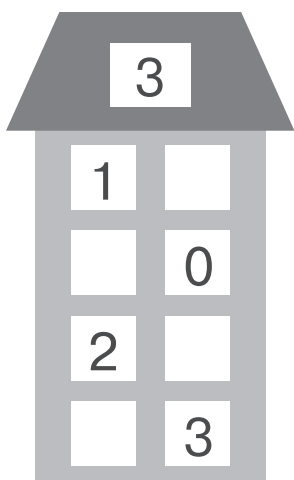
$0 + 2 = \underline{\quad}$
 $1 + 1 = \underline{\quad}$
 $2 + 0 = \underline{\quad}$



5

1	
	0
2	
	3
4	
	5

$0 + 5 = \underline{\quad}$
 $1 + 4 = \underline{\quad}$
 $2 + 3 = \underline{\quad}$
 $3 + 2 = \underline{\quad}$
 $4 + 1 = \underline{\quad}$
 $5 + 0 = \underline{\quad}$





3


1	
	0
2	
	3


$0 + 3 = \underline{\quad}$
 $1 + 2 = \underline{\quad}$
 $2 + 1 = \underline{\quad}$
 $3 + 0 = \underline{\quad}$


Make it equal


 = 6


 = _____


 = _____


 = _____


 = _____


 = _____


 = _____


 = _____


 = _____


 = _____


 = _____


 = _____


 = _____


 = _____


 = _____


 = _____


 = _____


 = _____


 = _____

 = _____

 = _____

 = _____

 = _____

 = _____

Make it equal

Insert a correct number to make equations true



$6 - \underline{\quad} = 4$

$\underline{\quad} + 5 = 20$

$13 - \underline{\quad} = 12$

$\underline{\quad} - 6 = 2$

$10 + \underline{\quad} = 17$

$\underline{\quad} + 1 = 14$

$12 - \underline{\quad} = 6$

$\underline{\quad} - 8 = 7$

$6 - \underline{\quad} = 5$

$\underline{\quad} + 7 = 15$

$3 - \underline{\quad} = 2$

$\underline{\quad} + 4 = 10$

$1 + \underline{\quad} = 2$

$\underline{\quad} + 8 = 17$

$12 + \underline{\quad} = 15$

$\underline{\quad} - 1 = 2$

$13 - \underline{\quad} = 3$

$\underline{\quad} + 11 = 18$

$6 - \underline{\quad} = 5$

$\underline{\quad} - 5 = 3$

$7 - \underline{\quad} = 2$

$\underline{\quad} - 9 = 4$

$7 + \underline{\quad} = 14$

$\underline{\quad} + 9 = 16$

$10 - \underline{\quad} = 6$

$\underline{\quad} - 2 = 2$

$13 - \underline{\quad} = 10$

$\underline{\quad} - 9 = 5$

$8 + \underline{\quad} = 15$

$\underline{\quad} + 7 = 9$

$10 - \underline{\quad} = 1$

$\underline{\quad} + 5 = 12$

$8 + \underline{\quad} = 12$

$\underline{\quad} + 10 = 19$

$4 - \underline{\quad} = 3$

$\underline{\quad} + 7 = 14$

$13 - \underline{\quad} = 10$

$\underline{\quad} - 1 = 5$

$11 - \underline{\quad} = 4$