

10

Compare three numbers.



▶ Which number is largest?

1, 4, 5

▶ Which number is largest?

9, 6, 3

▶ Which number is smallest?

4, 3, 2

▶ Which number is smallest?

4, 3, 5

11

Fill in the missing number.



$$8 + \square = 10$$


$$5 - \square = 1$$

12

Add the hands to the clock so it represents the correct time.


Now

It is 7:00 AM now.
What time it is going
to be in 1 hour?

In 1 hour

5


Find the pattern and fill in the blanks.



$1 + 2 = 3$

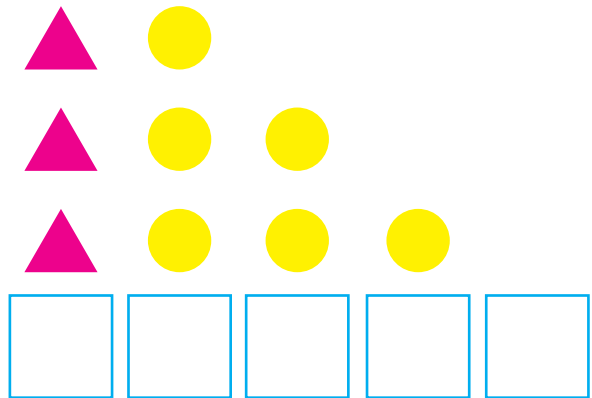
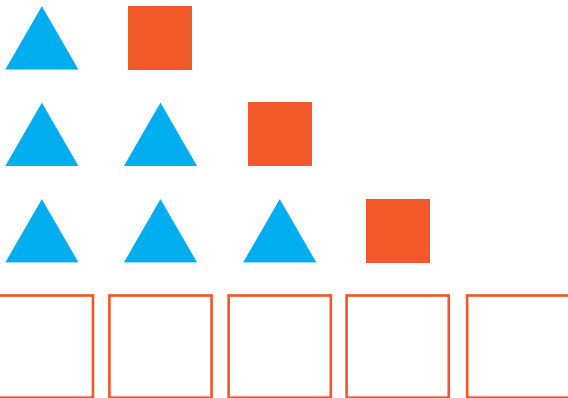
$2 + 0 = 2$

$3 + 2 = 5$




6

What row comes next in the pattern?

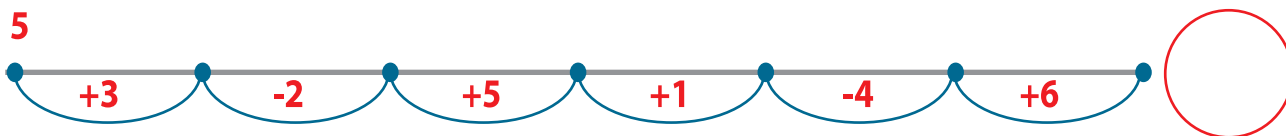
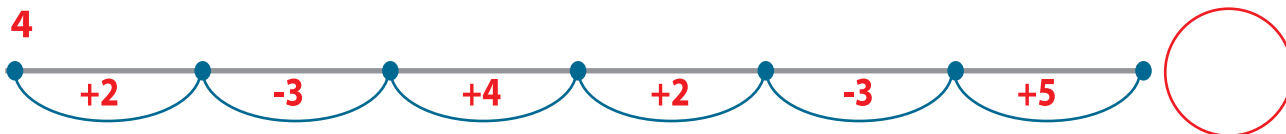
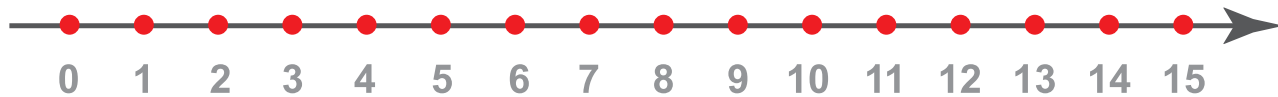


7

Find the next shape in a growing pattern.



2 Count along the chain using the number line. Write your answer in the circle on the right.



3 Place the dots on the number line.

9, 2, 6, 4



4 Find the distance between the two points.



3 and 7

7 and 11

11 and 6