

3

Mental counting.

$5 - 1 = \underline{\quad}$

$4 + 1 = \underline{\quad}$

$3 - 3 = \underline{\quad}$

$8 + 0 = \underline{\quad}$

$7 + 2 = \underline{\quad}$

$8 + 2 = \underline{\quad}$

$2 - 1 = \underline{\quad}$

$4 + 1 = \underline{\quad}$

$3 - 2 = \underline{\quad}$

$8 + 2 = \underline{\quad}$

$7 - 0 = \underline{\quad}$

$7 - 1 = \underline{\quad}$

$6 + 3 = \underline{\quad}$

$3 - 2 = \underline{\quad}$

$6 - 2 = \underline{\quad}$

$1 + 1 = \underline{\quad}$

$3 + 0 = \underline{\quad}$

$5 + 2 = \underline{\quad}$

$8 + 2 = \underline{\quad}$

$3 + 1 = \underline{\quad}$

$2 - 1 = \underline{\quad}$

$6 - 1 = \underline{\quad}$

$7 - 1 = \underline{\quad}$

$5 - 1 = \underline{\quad}$

$9 - 2 = \underline{\quad}$


$9 + 1 = \underline{\quad}$

$3 + 1 = \underline{\quad}$


$5 - 0 = \underline{\quad}$

4


Create your own problem based on the picture and solve it.




$10 - 4 =$



$7 - 5 =$



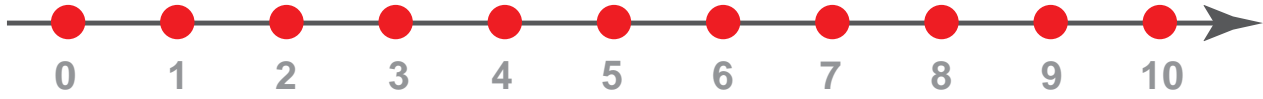
$3 + 4 =$



$3 + 6 =$

5

Count along the chain using the number line. Write your answer in the circle on the right.



1

+2 -1 +5 -2 +3

2

+1 -2 +1 +2 -3

0





+1 +5 +2 -4 +2

0

+2 +5 +3 -4 -2

6

Count the objects in the group on the left and write the amount. Which of the two right groups has one more than what you counted?



7

Count the animals by 2s. Write your answer in the square on the right.










8

Fill in the blanks in the windows of the house. The sum of the numbers on each story of the house should equal the number indicated on the roof.



$0 + 5 =$

$1 + 4 =$

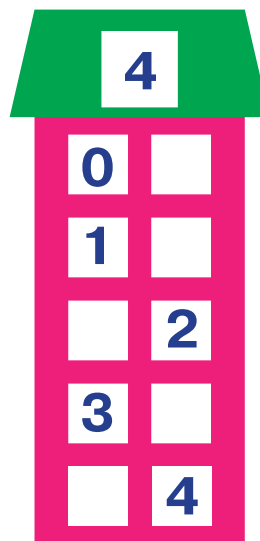
$3 + 2 =$

$2 + 3 =$

$5 - 0 =$

$5 + 0 =$

$4 + 1 =$



$0 + 4 =$

$1 + 3 =$

$3 + 1 =$

$2 + 2 =$

$4 - 0 =$

$4 - 3 =$

$4 - 1 =$